


Measures

CMI

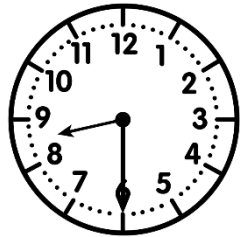
...../...../.....
PRÉNOM :




① Écris l'heure (matin/après-midi) sous chaque horloge.



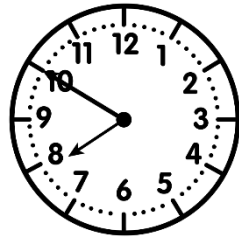
h h



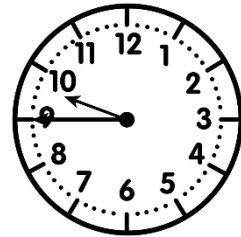
h h




h h



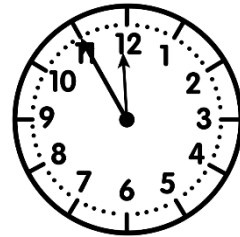
h h



h h



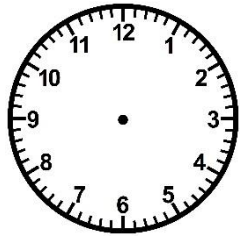

h h



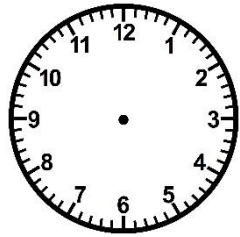
h h



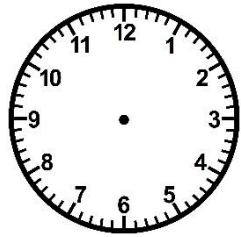
② Trace les aiguilles (rouge pour les heures, bleue pour les minutes).



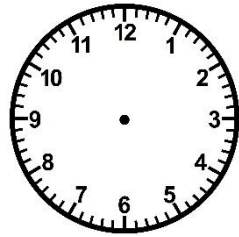
6 h 30



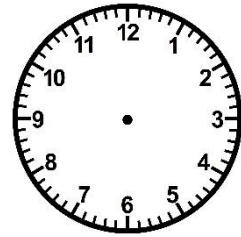
15 h 15



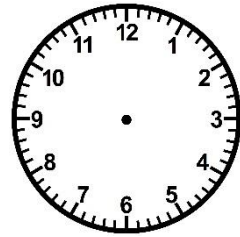
9 h 50



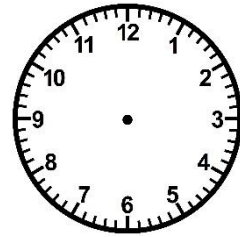
21 h 05



12 h 00



17 h 40



23 h 25

③ Complète ces égalités.

a) $7\text{h } 45\text{min} + \underline{\hspace{2cm}} = 8\text{h}$
b) $3\text{h } 20\text{min} + \underline{\hspace{2cm}} = 4\text{h}$

c) $10\text{h } 55\text{min} + \underline{\hspace{2cm}} = 11\text{h}$
d) $16\text{h } 30\text{min} + \underline{\hspace{2cm}} = 17\text{h}$
e) $23\text{h } 15\text{min} + \underline{\hspace{2cm}} = 0\text{h}$

f) $12\text{h } 10\text{min} + \underline{\hspace{2cm}} = 13\text{h}$
g) $21\text{h } 50\text{min} + \underline{\hspace{2cm}} = 22\text{h}$
h) $9\text{h } 40\text{min} + \underline{\hspace{2cm}} = 10\text{h}$