
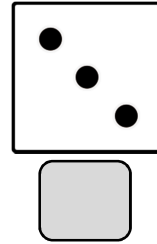
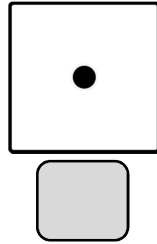

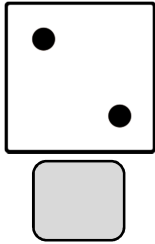





Mathématiques

Les nombres de 0 à 5

1. Écrire le nombre indiqué par chaque face du dé.



2. Colorier le nombre de cases.



3. Compter le nombre de fruits.

