

Prénom :


Date

Calcul


Addition de deux nombres en ligne. Somme ≤ 5

0 1 2 3 4 5 6 7 8 9

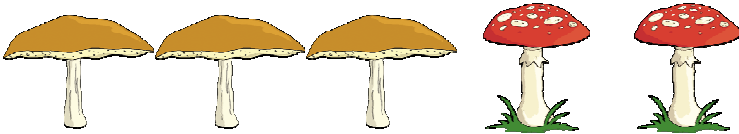
Écrire les sommes.



$$\square + \square = \square$$



$$\square + \square = \square$$




$$\square + \square = \square$$



$$\square + \square = \square$$



$$\square + \square = \square$$



$$\square + \square = \square$$



$$\square + \square = \square$$