

Measures

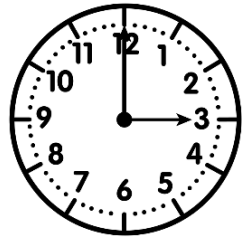
CMI

..... / /

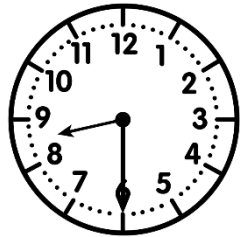
PRÉNOM :




① Ecris l'heure sous chaque horloge.



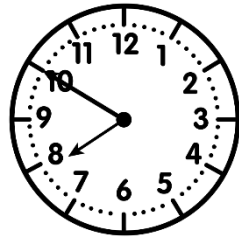
3h00 15h00



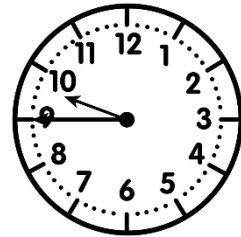
8h30 20h30




1h25 13h25



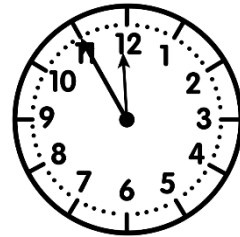
7h50 19h50



9h45 21h45



5h20 17h20

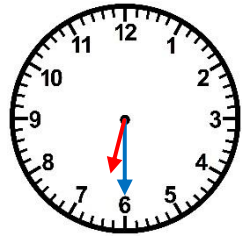


11h55 23h55

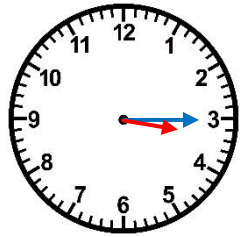


② Trace les aiguilles (rouge pour les heures, bleu pour les minutes).

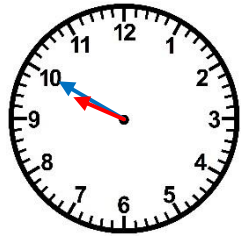
<https://laclassobleue.fr/>



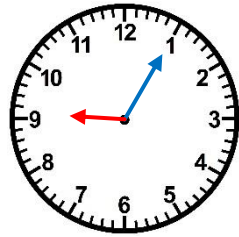
6 h 30



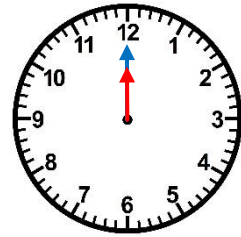
15 h 15



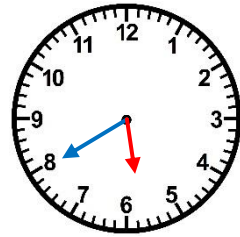
9 h 50



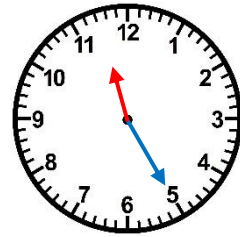
21 h 05



12 h 00



17 h 40



23 h 25

③ Complete ces égalités.

a) 7h 45 min + 15 min = 8h
 b) 3h 20 min + 40 min = 4h

c) 10h 55 min + 5 min = 11h
 d) 16h 30 min + 30 min = 17h
 e) 23h 15 min + 45 min = 0h

f) 12h 10 min + 50 min = 13h
 g) 21h 50 min + 10 min = 22h
 h) 9h 40 min + 20 min = 10h