


géométrie

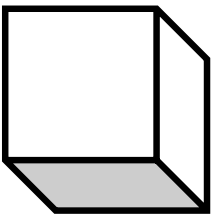
CM1



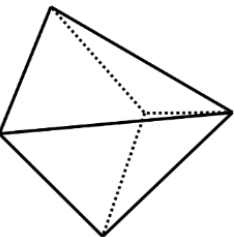
Date

Prénom

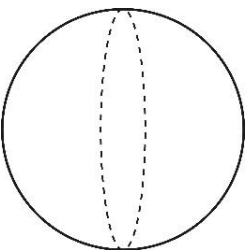
1. Les figures sont-elles des polyèdres ?



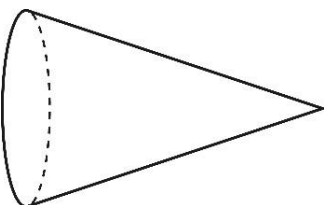
Oui Non




Oui Non



Oui Non



Oui Non

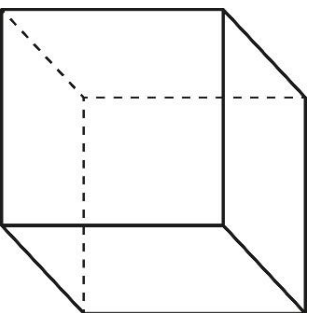
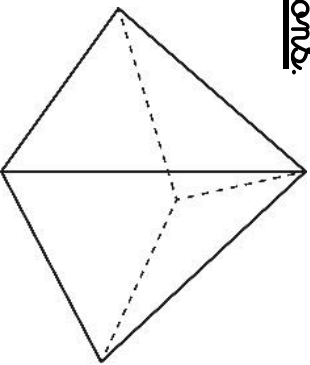


Oui Non



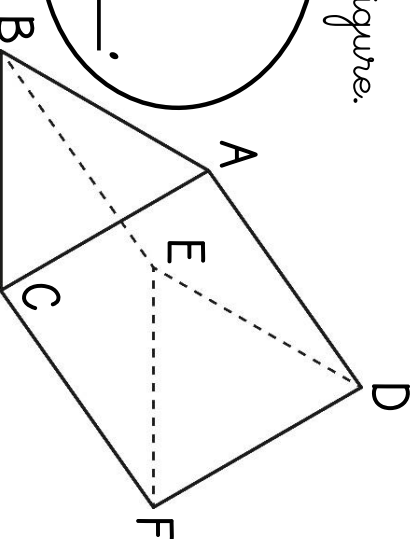
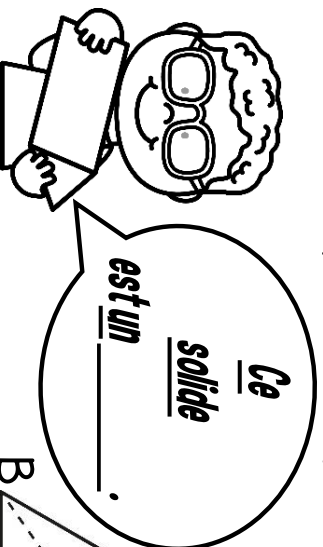
Oui Non

2. Observe ces solides, puis réponds avec questions.



- a) Marque leurs sommets en vert.
- b) Peins leurs arêtes en bleu.
- c) Colorie deux faces opposées en jaune.

3. a) Décalque cette figure.



- b) Nomme ses 2 bases.
- c) Quelle forme ont les bases de ce solide ?
- d) Nomme les faces, les arêtes et les sommets de ce solide.