



Mesures

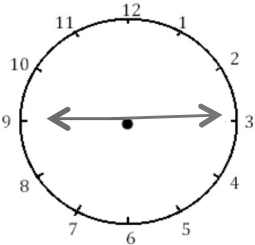
Fiche 7

Les heures



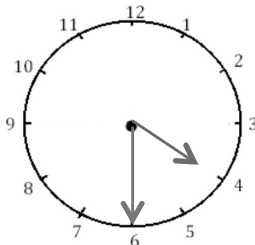
1

J'écris les heures du matin et de l'après-midi.



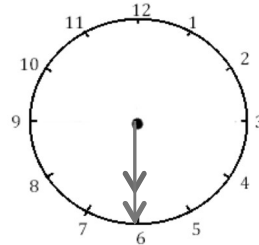
Il est ___ h ___ min.

Il est ___ h ___ min.



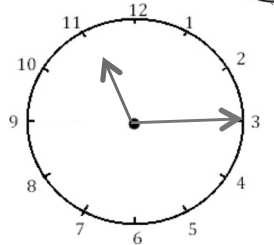
Il est ___ h ___ min.

Il est ___ h ___ min.



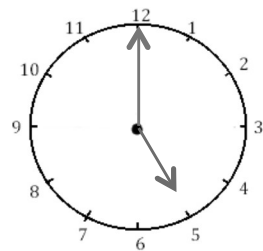
Il est ___ h ___ min.

Il est ___ h ___ min.



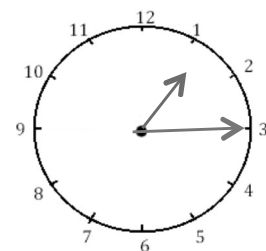
Il est ___ h ___ min.

Il est ___ h ___ min.



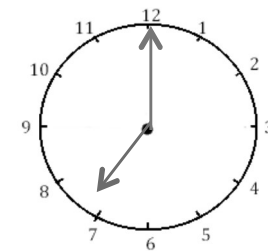
Il est ___ h ___ min.

Il est ___ h ___ min.



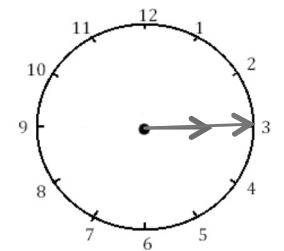
Il est ___ h ___ min.

Il est ___ h ___ min.



Il est ___ h ___ min.

Il est ___ h ___ min.



Il est ___ h ___ min.

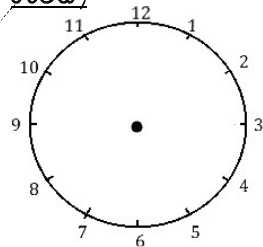
Il est ___ h ___ min.



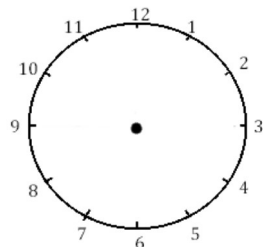
2

Je place les aiguilles selon les heures indiquées. (heures en rouge, minutes en

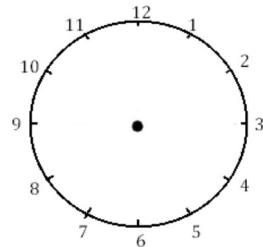
bleu)



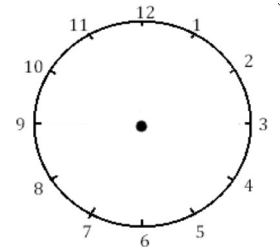
Il est midi.



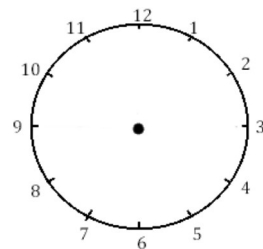
Il est 1 h et quart.



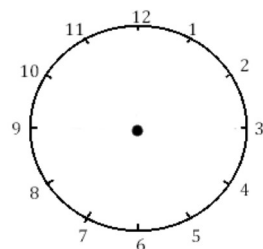
Il est 22 heures.



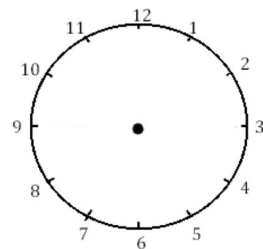
Il est 8 h et demie.



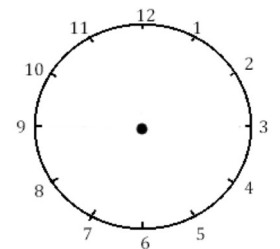
Il est 16 h et quart.



Il est 11 h et demie.



Il est minuit.



Il est 9 h et quart.