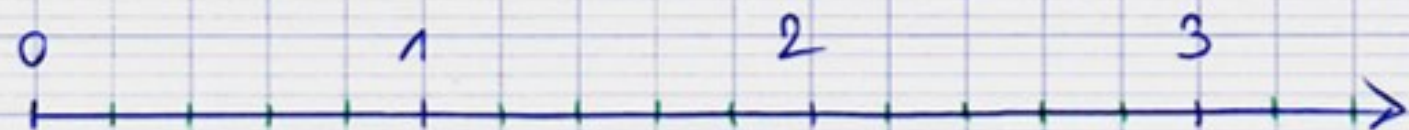




ex. 1:



Place ces fractions sur la bonne droite :

$$\frac{4}{5} ; \frac{2}{3} ; \frac{4}{4} ; \frac{1}{4} ; \frac{6}{5} ; \frac{3}{3} ; \frac{1}{5} ; \frac{0}{4} ; \frac{6}{3}$$