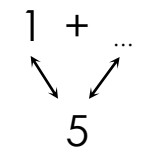
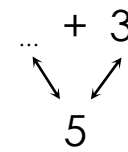
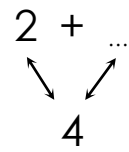
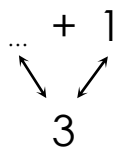
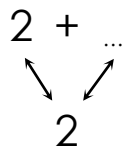
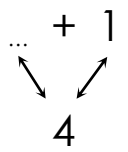
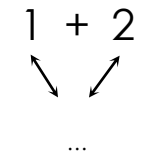
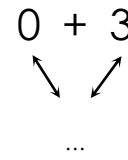
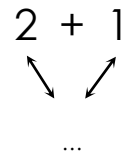
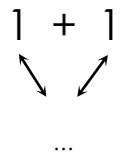
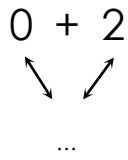
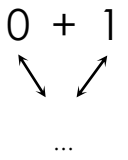
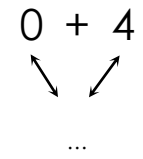
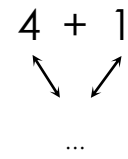
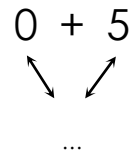
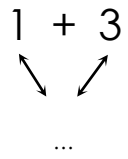
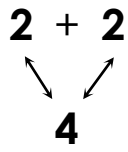
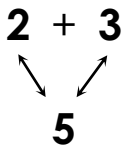
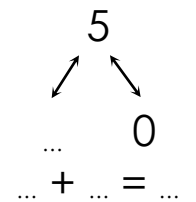
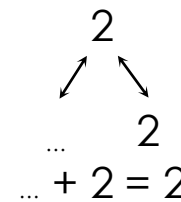
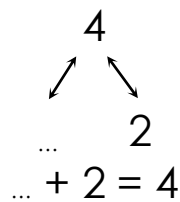
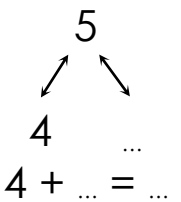
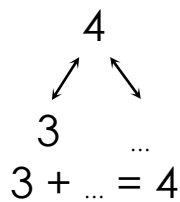
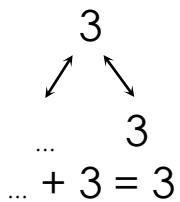
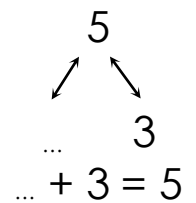
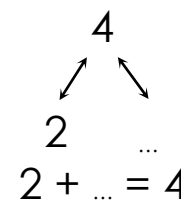
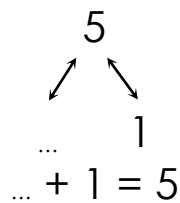
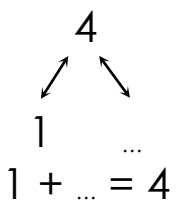
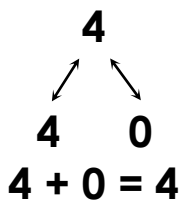
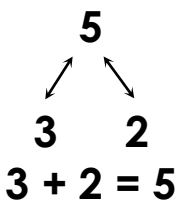


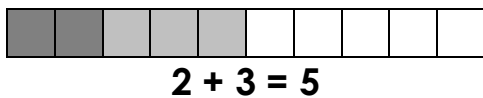
- Complète suivant les exemples :



- Complète suivant les exemples :

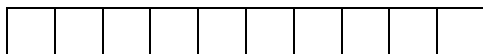


- Colorie le nombre de cases et complète suivant l'exemple :




$$2 + 3 = 5$$

$$\begin{array}{r} 3 \\ + 2 \\ \hline 5 \end{array}$$



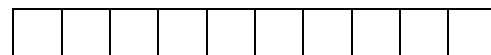
$$2 + \dots = 4$$

$$\begin{array}{r} 2 \\ + \dots \\ \hline 4 \end{array}$$



$$4 + 4 = \dots$$

$$\begin{array}{r} 4 \\ + 4 \\ \hline \dots \end{array}$$




$$4 + 1 = \dots$$

$$\begin{array}{r} 4 \\ + 1 \\ \hline \dots \end{array}$$



$$\dots + 3 = 6$$

$$\begin{array}{r} \dots \\ + 3 \\ \hline 6 \end{array}$$



$$5 + 5 = \dots$$

$$\begin{array}{r} 5 \\ + 5 \\ \hline \dots \end{array}$$